

Sketch the object represented by the orthographic projection.

1. TOP



FRONT

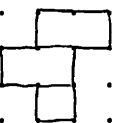


SIDE

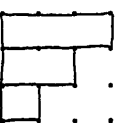


3.

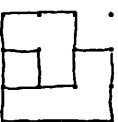
TOP



FRONT



SIDE



2.

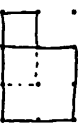
TOP



FRONT

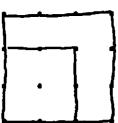


SIDE

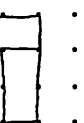


4.

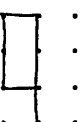
TOP



FRONT



SIDE


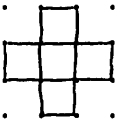


Name:



Date:

Sketch the object represented by the orthographic projection.

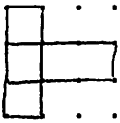
5. TOP



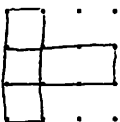
7. TOP



FRONT



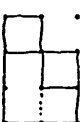
SIDE




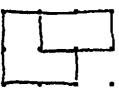
FRONT




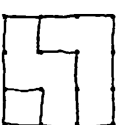
SIDE



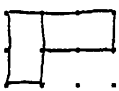
6. TOP



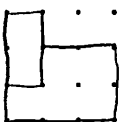
8. TOP



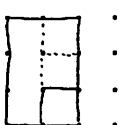
FRONT



SIDE



FRONT



SIDE

